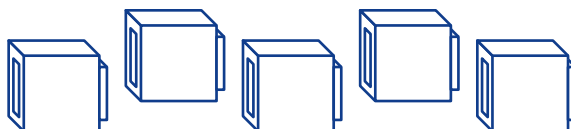


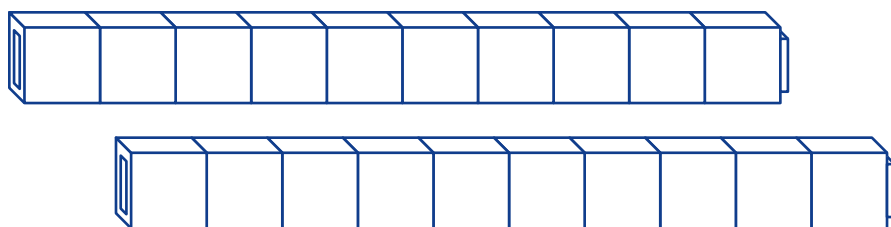
NAME: _____

Math Words

ones Five ones means 5 single things.



tens Two tens means 2 groups of 10 things.



Starter Problem

Copy and complete the number sentence.

$$5 + 20 = \underline{\hspace{2cm}}$$

NAME: _____

Starter Problem

Copy and complete the number sentence.


$$5 + 20 = \underline{\hspace{2cm}}$$

Student Thinking



Sam

I drew 5 blocks and 20 blocks.
It's easy if I start with 20 and
add 5 more. It's 25.



Kimi

I can add in my head. 5 plus 2 is 7.
Then I put on the 0. That makes 70.



$$5 + 20 = \underline{70}$$

NAME: _____

Things to Remember



Handwriting practice lines consisting of solid top and bottom lines with a dashed middle line. A solid grey rectangular box is located below the first set of lines.



Handwriting practice lines consisting of solid top and bottom lines with a dashed middle line.

NAME: _____

Our Turn

Complete each number sentence.

1. $30 + 2 = \underline{\hspace{2cm}}$

2. $5 + 40 = \underline{\hspace{2cm}}$

3. $\underline{\hspace{2cm}} = 10 + 7$

NAME: _____

My Turn

Complete each number sentence.

1. $60 + 3 = \underline{\hspace{2cm}}$

2. $6 + 10 = \underline{\hspace{2cm}}$

3. $\underline{\hspace{2cm}} = 4 + 30$

NAME: _____

Mini Lesson

Fill in the circle next to the answer you choose.

1. $40 + 2 + 1 = \underline{\hspace{2cm}}$

☐ 421☐ 70☐ 43

2. $\underline{\hspace{2cm}} = 8 + 30$

☐ 110☐ 830☐ 38